



A Detailed Puzzle

How well do you remember details from the story? This crossword puzzle will put your knowledge to the test. Clues can be found below.



Across

- 2. scarves worn around neck in cold weather
- 4. day of rest and worship
- 6. the state in which this story is set
- 8. a wooden frame fitting over the shoulders
- 10. groomed the horse
- 11. the town 7 miles from the Ingalls' house
- 12. a printed, cotton fabric
- 14. bed that slid under the big bed
- 15. bread made of cornmeal
- 16. lining of a young calf's stomach

Down

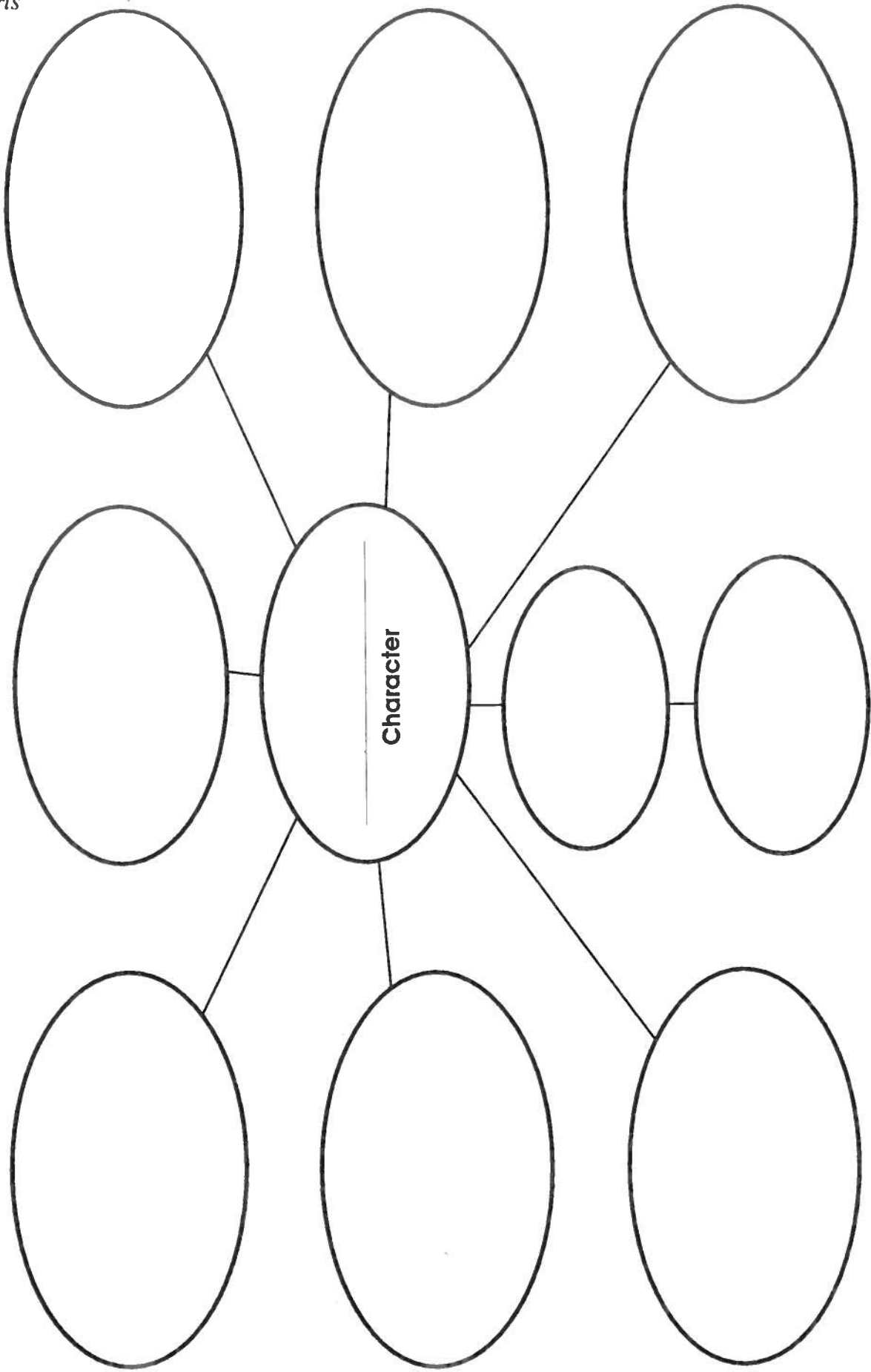
- 1. meat from a deer
- 3. five bundles of oats, stood against one another
- 5. a balloon was made from this pig part
- 7. Laura's rag doll
- 9. Jack was this type of dog
- 13. the front of the barrel of a rifle

Word Bank

- | | | | | | |
|----------|--------|-----------|-----------|---------|-------------|
| Illinois | Pepin | venison | mufflers | muzzle | curried |
| yoke | rennet | Charlotte | Wisconsin | bulldog | bladder |
| Sabbath | Carrie | calico | shock | trundle | johnny-cake |

Character Report

Write a character's name in the center oval. As you read the story, write words or phrases that describe the character.



Name _____


Word Power

Make compound words by combining a word from Box A with a word from Box B. Write the compound words on the proper lines to complete each sentence from the story.

A				
story	store	night	drum	over
bare	wood	fire	down	dress

B				
stick	keeper	head	gown	maker
light	telling	foot	pile	hill

1. "After the sun went down, they could not slide _____, not even once."
2. "He had shot a bear. Laura and Mary jumped up and down...Mary shouted: 'I want the _____!'"
3. "The _____ was busy, and I had to wait until he could look at my furs."
4. "They were at the _____, gathering a pan of chips to kindle the fire in the morning."
5. "Ma had been very fashionable, before she married Pa, and a _____ had made her clothes."
6. "After the bullets were made and the gun was loaded, came _____ time."
7. "Ma's shadow, and Aunt Eliza's and Uncle Peter's were big and quivering on the walls in the flickering _____."
8. "As soon as the days were warm, Laura and Mary begged to be allowed to run _____."
9. "...After she was bathed and put into her clean _____, Pa must empty the washtub..."
10. "Then Grandpa caught a glimpse of it, as it leaped from treetop to treetop, almost _____."



End Marks *(cont.)*

Put a period, a question mark, or an exclamation mark at the end of each sentence below, and on the line after the sentence, write “*declarative*,” “*interrogative*,” “*imperative*,” or “*exclamatory*.”


1. Oh boy, it's time for recess _____
2. I'm not sure where to go because I'm new here _____
3. Where do I go for recess _____
4. Do you mean “way over there where it's all sandy” _____
5. Oh well, at least there are some swings over here _____
6. Hey, watch where you're going _____
7. Don't throw sand _____
8. Now that's an interesting looking ball _____
9. Where did you get it _____
10. Be careful where you throw that thing _____
11. Can I play too _____
12. I'm not kidding, I really like to play _____
13. Oh no, there goes the bell _____
14. Okay class, let's line up _____
15. I really didn't get much of a chance to play, but I suppose I already had my chance when I was little; now I need to be the teacher _____



Review

It is time to see how much you have learned about capitalization. Circle all the letters below that should be capitals. (*Hint: there are 63 of them.*)

1. the first day of school is exciting.
2. freddy wilson's frog peepers hopped into mrs. woolsey's purse.
3. as i walked outside, i smelled smoke.
4. In the play, robin hood was played by lieutenant bronksy.
5. the fourth thursday in november is thanksgiving.
6. i like halloween best when it is on a saturday.
7. aunt susan went to yellowstone national park.
8. connie lives on maple street in bismark, north dakota.
9. brazil, argentina, and peru are in south america.
10. the mediterranean sea and the atlantic ocean touch spain.
11. the letter was signed, "love always, esther."
12. davis medical center opened in january last year.
13. one of the religions practiced by many african people is islam.
14. italians and germans belong to the caucasian race.
15. last tuesday ruben walked his dog spotty down tulip street to central park.



What's in a Name? *(cont.)*

Each year the students at Wiggleworm School have a pet day. On pet day each student is allowed to bring a pet to school to share. Usually things go pretty well, but this year things got a little out of hand. In this story about the pet show, draw a line through each letter that needs to be capitalized and write the capital letter above it.

Pet Day at Wiggleworm Elementary School

mrs. wolfe was in charge, and she stood at the entrance of wiggleworm elementary school to welcome the students. lindsay harper entered first with her goldfish named twitty. Next came lorenzo lopez with a cat, fang. fang scratched lorenzo and tried to get a bite of the goldfish, twitty. When samantha rissota arrived with her big, shaggy dog named crackers, crackers immediately took off after fang, the cat, dragging samantha behind as she held fast to the leash. As samantha went flying by, she accidentally knocked over jacob fritz and his ant farm. The ant farm broke, and thousands of ants began to crawl away. "doc, loretta, steve and darlene, licorice, pepper—come back!" jacob knelt over the ants and pleaded with them to return. Just then, fibber, tasha armstrong's parrot, landed next to the ants and looked at them with great interest. "fibber!" tasha cried and raced across the room to tackle her parrot. The parrot flew to perch on the light fixtures, and tasha flew into jonny mcandrew, who was carrying two pet frogs, antony and cleopatra. The frogs hopped away slowly and then more quickly as they realized they were being chased by fang the cat. fang the cat was being chased by crackers the dog, and lindsay harper was trying to get her goldfish, twitty, back into the bowl, but she was too slippery. mrs. wolfe was trying to remove the ants that were crawling on her when she saw victoria pleasant arriving with her snake, priscilla, and jake jasso coming up behind victoria with his pet monkey, billie. mrs. wolfe, scratching her arms and legs, blocked the doorway, which surprised victoria, priscilla, jake, and billie. "Stop! You're too late. Pet day is over. This was the last pet day ever, and you may go home now. Try not to be late for school tomorrow!" victoria, with priscilla wrapped around her neck, smiled and skipped home. When jake peeked in the window to the classroom, he saw that mrs. wolfe was clapping her hands and saying, "Now class! It's a short day today; you may go home now!"

Extension: Illustrate the story. It might help if you make a list of all the pets and their owners first. Be sure to capitalize all their names.

Addition—Regrouping

19

★ When you add 3-digit numbers, you sometimes regroup 10 tens as 1 hundred.

Add the ones.
 $4 + 3 = 7$

	hundreds	tens	ones
	5	2	4
+	2	8	3
			7

Add the tens.
 $2 + 8 = 10$

	hundreds	tens	ones
	1	5	2
	2	8	3
+			
		0	7

Add the hundreds
 $1 + 5 + 2 = 8$

	hundreds	tens	ones
	1	5	2
	2	8	3
+			
	8	0	7

Add the digits in each place in the problem. Circle **ones**, **tens**, or **none** to show which place needs to be regrouped. Then add to solve.

1 $\begin{array}{r} 257 \\ +362 \\ \hline \end{array}$	none tens ones	$\begin{array}{r} 409 \\ +390 \\ \hline \end{array}$	none tens ones
---	----------------------	--	----------------------

$\begin{array}{r} 89 \\ +841 \\ \hline \end{array}$	none tens ones	$\begin{array}{r} 432 \\ +338 \\ \hline \end{array}$	none tens ones
---	----------------------	--	----------------------

2 $\begin{array}{r} 509 \\ +203 \\ \hline \end{array}$	none tens ones	$\begin{array}{r} 624 \\ +194 \\ \hline \end{array}$	none tens ones
---	----------------------	--	----------------------

$\begin{array}{r} 213 \\ +646 \\ \hline \end{array}$	none tens ones	$\begin{array}{r} 166 \\ +343 \\ \hline \end{array}$	none tens ones
--	----------------------	--	----------------------

3 $\begin{array}{r} 350 \\ +350 \\ \hline \end{array}$	none tens ones	$\begin{array}{r} 464 \\ +327 \\ \hline \end{array}$	none tens ones
---	----------------------	--	----------------------

$\begin{array}{r} 621 \\ +126 \\ \hline \end{array}$	none tens ones	$\begin{array}{r} 88 \\ +220 \\ \hline \end{array}$	none tens ones
--	----------------------	---	----------------------

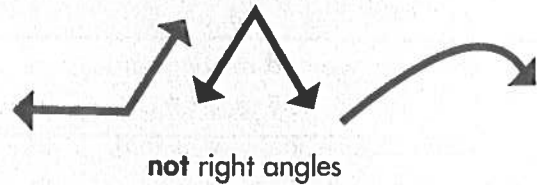
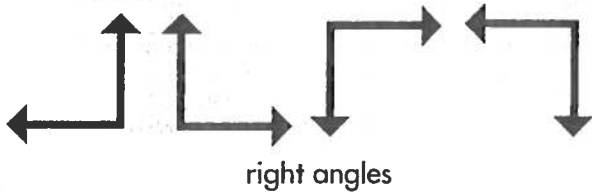
Add to find the sum. Regroup ones or tens when needed.

4 $\begin{array}{r} 219 \\ +162 \\ \hline \end{array}$	$\begin{array}{r} 239 \\ +143 \\ \hline \end{array}$	$\begin{array}{r} 138 \\ +390 \\ \hline \end{array}$	$\begin{array}{r} 872 \\ + 66 \\ \hline \end{array}$	$\begin{array}{r} 336 \\ + 58 \\ \hline \end{array}$	$\begin{array}{r} 293 \\ + 535 \\ \hline \end{array}$
---	--	--	--	--	---

Shapes

77

★ Plane figures are flat, closed shapes. Angles are where two sides meet.



Count the sides and the angles for each shape shown. Write **yes** or **no** to tell if the shape has right angles.

		sides	angles	right angles
1	triangle	3		
2	rectangle			
3	square			
4	circle			
5	pentagon			
6	hexagon			
7	octagon			

ESTIMATION

Circle the most logical answers for a family attending a professional football game.

Example: The temperature at game time? 50°C 50°F

Remember: No answer is exact, but one answer is more logical.

1. The price of a ticket? \$0.49 \$2.50 \$37.50 \$495
2. The number of players on the home team? 12 40 200 850
3. The number of tickets sold? 250 3,500 50,000 500,000
4. The price of a soft drink? \$0.20 \$2.00 \$10.00 \$50.00
5. The number of touchdowns? 4 25 200 500
6. The number of field goals? 5 20 50 500
7. The cost of a game football? \$2.50 \$5.00 \$20.00 \$60.00
8. The length of a game? 30 minutes 1 hour 3 hours 10 hours
9. Number of cars in the parking lot? 50 500 5000 100,000
10. The yearly salary of the quarterback? \$1000 \$10,000
\$50,000 \$500,000
11. The number of people watching the game on TV? 100 1000
10,000 400,000
12. The final score? 4 to 1 24 to 7 116 to 88 200 to 100

