

Spelling List

Second Grade

dread

shred

thread

tread

medal

meddle

pedal

peddle

dredge

pledge

wedge

ledge

To, Too, and Two

The words **to**, **too**, and **two** are homophones. They sound the same but are spelled differently. Here is how to remember which one to use:

to
toward, direction

too
also

two
the number 2


Read the pen pal letters. Write **to**, **too**, or **two** in each blank.

Dear Pen Pal,

My name is Holly. I live on a farm. I have _____ goats. I have a cat, _____. I like milking the goats. I like putting the milk on my cereal. My cat Inky likes the milk, _____. In _____ weeks we will take my goats _____ the fair.

Please write soon.

Your friend,
Holly



Dear Holly,

My name is Amber. I have a cat, _____. My cat has _____ black feet and _____ white feet. I hope I can meet your goats. I would drink some milk, _____.

Your friend,
Amber

There, Their, They're

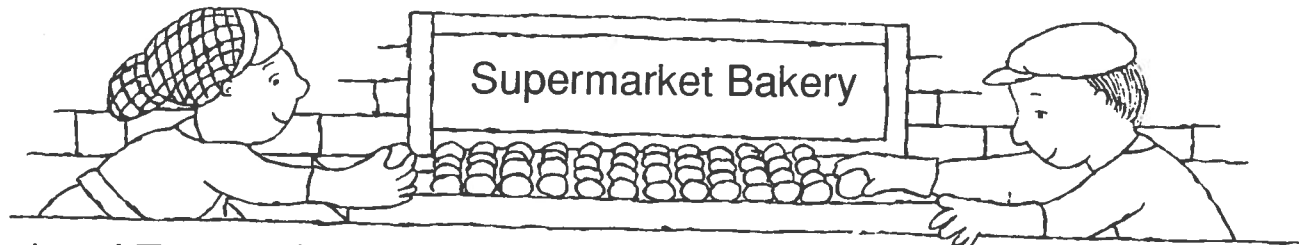
The words **there**, **their**, and **they're** are homophones. They sound the same but are spelled differently. Here is how to remember them:

there
a place

their
belonging to them

they're
they are

Finish the story by writing **there**, **their**, or **they're** in each blank.



Lori and Tom work in a supermarket bakery.

_____ job is to bake rolls.

_____ putting frozen rolls onto trays.

The trays go into a cooler. The rolls will thaw _____.


Late at night _____ taken out.

Now the rolls go into the steamer. The rolls get puffy. Tom takes them out of _____

_____ and puts them in the oven.

After _____ baked, Lori puts the rolls in bags.

People come to the bakery to get rolls for _____ dinners.



afternoon
 again
 around
 because
 birthday
 close
 fall
 kind
 shoes
 stick


Write the correct word in the blank.
Then write the word in the puzzle.

ACROSS

1. We can't go swimming today _____ it's too cold.
2. There will be no school this _____.
3. Grandpa went to the store to buy a new pair of _____.
4. You can be sure I'll never go over there _____.
5. Mrs. Gordon is a very gentle and _____ old woman.

DOWN

1. Ron will be ten years old on his next _____.
2. My mother always has to remind me to _____ the window.
3. Please, be careful not to _____ out of the tree.
4. This old stamp won't _____ to this letter.
5. The girls wound this rope _____ the pole just for fun.



Write the correct word in the blank.
Then write the word in the puzzle.

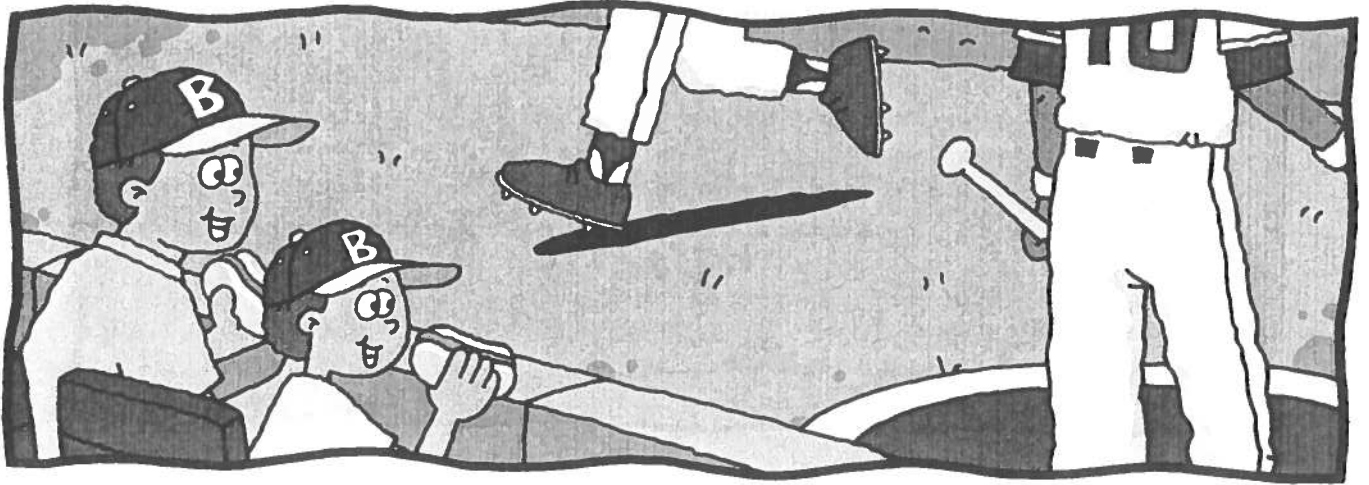
ACROSS

1. Tom and Debbie live _____ the street from our house.
2. Our family does many things _____.
3. Math is very _____ for me to understand.
4. Which _____ of the bench do you want to sit on?
5. This isn't my ring. Is it _____?

DOWN

1. You should turn _____, not left, at the next corner.
2. My brother is _____ hard for his exams.
3. Greg hit the _____ hard when he jumped down.
4. Those apples aren't ripe, but _____ are.
5. My aunt goes to the park to _____ the ducks.

Guys at the Game



Ethan won tickets to a baseball game. He and his dad love baseball. They are going to the game together. They put on baseball caps and ride the train. Soon they arrive at the baseball stadium. Ethan can't believe how big it is! They walk inside. There must be thousands of people here. They find their seats. Ethan and his dad are sitting close to home plate. These are great seats! Ethan can't wait for the game to begin. A man is selling hot dogs. Ethan's dad buys two for them. Ethan eats his hot dog right away. Then the baseball game begins. The Sliders are batting first. A player steps up to the plate. The ball zooms at him. He swings the bat. Crack! The ball flies high and far. It goes out of the stadium. It's a home run!

What's the order? Draw a line to match each part of the story.

first

The Sliders make a home run.


second

Ethan eats a hot dog.

third

Ethan and his dad find their seats.

Thunder and Lightning




The sky is turning gray. Flash! Boom! What's that? Don't be afraid. It's just a thunderstorm. The rain will fall soon. The thunderstorm tells you that it's coming. First, you see the lightning. The whole sky may light up for a second. Look carefully. The lightning makes a wiggly line. It reaches from the clouds to the ground. Next, you will hear thunder. It is loud and can make you jump. The lightning and thunder will keep coming. They will get closer together. Do you see lightning and hear thunder at the same time? That is when the thunderstorm is right above you. Watch out for the rain! But don't run under a tree. Sometimes lightning hits a tall tree or building. Stay safe while you enjoy the show in the sky.

Answer the questions below. Use the words in the word bank.

lightning tree thunder

1. What part of a thunderstorm comes first? _____
2. What part comes next? _____
3. What should you not stand under during a thunderstorm? _____

Caught Kite




Marissa thinks that spring is the best season. Flowers are blooming. Birds are chirping. The weather is warm and very windy! Spring is the best time to fly a kite. Marissa and her brother Jared have contests. They see who can keep their kite in the air longer. She and Jared bring their kites to the big park. Marissa's kite is orange and red. Jared's kite is blue and green. They hold their kites and spools of string. The wind lifts the kites in the air. They turn the spools. The kites go higher. They look like small butterflies. Then the wind blows strong. Marissa's kite flies over to a tree. Her kite is caught around a branch! The wind blows strong again. It blows her kite free. Now she doesn't see Jared's kite. It is on the ground. Jared was too busy watching Marissa's kite. He didn't see that his kite was falling. Marissa wins the contest!

Answer the questions below.

1. What are Marissa and Jared flying? _____
2. Where does Marissa's kite get caught? _____
3. Who wins the contest? _____

Choose the correct letter for each answer.

1. Which of the following does not tell about this picture?



- A. $4 + 6$ B. $4 + 4 + 4 + 4 + 4 + 4$
C. 6×4 D. 4×6

3. Which number makes this number sentence true.

$$6 \times 1 = \underline{\quad}$$

- A. 0 B. 1 C. 6 D. 60

5. Which number makes this number sentence true.

$$5 \times \underline{\quad} = 0$$

- A. 10 B. 5 C. 1 D. 0

7. How many inches are in 6 feet?

- A. 12 B. 60
C. 66 D. 72

9. Which number makes this number sentence true.

$$6 \times \underline{\quad} = 60$$

- A. 0 B. 1 C. 10 D. 12

2. For the 2s multiplication facts, the ones digit is _____ in the product.

- A. 1, 2, 3, 4, or 5
B. 2, 4, 6, 8, or 0
C. 1, 2, 4, or 8
D. 0 or 2

4. Which number makes this number sentence true.

$$2 \times 4 \times \underline{\quad} = 80$$

- A. 6 B. 8 C. 10 D. 12

6. In the fact $5 \times 9 = 45$, the 9 is the _____.

- A. addend B. divisor
C. factor D. product

8. How many eggs are in 9 dozen?

- A. 12 B. 96
C. 108 D. 120

10. $11 + 11 + 11 + 11$ is not the same as _____.

- A. 11×4 B. 5×11
C. $44 + 11$ D. $33 + 11 + 11$

Multiplication: No Regrouping

Multiply the ones.

Multiply the tens.

Multiply the hundreds.

Multiply the thousands.

$$\begin{array}{r} 4,321 \\ \times \quad 3 \\ \hline 3 \end{array}$$

$$\begin{array}{r} 4,321 \\ \times \quad 3 \\ \hline 63 \end{array}$$

$$\begin{array}{r} 4,321 \\ \times \quad 3 \\ \hline 963 \end{array}$$

$$\begin{array}{r} 4,321 \\ \times \quad 3 \\ \hline 12,963 \end{array}$$

Find the products.

1.
$$\begin{array}{r} 24 \\ \times 2 \\ \hline \end{array}$$

$$\begin{array}{r} 91 \\ \times 8 \\ \hline \end{array}$$

$$\begin{array}{r} 62 \\ \times 4 \\ \hline \end{array}$$

2.
$$\begin{array}{r} 501 \\ \times 7 \\ \hline \end{array}$$

$$\begin{array}{r} 813 \\ \times 3 \\ \hline \end{array}$$

$$\begin{array}{r} 732 \\ \times 3 \\ \hline \end{array}$$

3.
$$\begin{array}{r} 7,310 \\ \times \quad 2 \\ \hline \end{array}$$

$$\begin{array}{r} 9,141 \\ \times \quad 2 \\ \hline \end{array}$$

$$\begin{array}{r} 6,222 \\ \times \quad 4 \\ \hline \end{array}$$



Solve the problems.

4. The average number of people living in one house in Mexico is **6**. In a small village, there are about **410** houses. How many people are living in the small village?

5. Enrico had **4** hoses. Each was **42** feet long. How long were they when he hooked them all together?

Mid-Test Chapters 1-6

SHOW YOUR WORK

Solve each problem.

38. A total of 68 hikers went on a trip to Blue Hill Mountain. If 32 of the hikers were boys, how many hikers were girls?

_____ hikers were girls.

39. On a trip to Washington, D.C., there were 33 fifth-graders and 27 fourth-graders. How many students were on the trip?

There were _____ students on the trip.

40. At the picnic grove, bird watchers saw 42 robins looking for worms. If there were 5 times as many starlings as robins, how many starlings were there?

There were _____ starlings.

41. A group of friends is getting ready for a hike at night. Each of their flashlights take 4 batteries. If they have 72 batteries, how many flashlights can they take?

They can take _____ flashlights.

Estimate your answer.

42. There are 21 members of the soccer team on the bus. If each player carries on 4 pieces of equipment, about how many pieces of equipment are on the bus?

There are about _____ pieces of equipment on the bus.

43. At the high school, all textbooks must be turned in at the end of the year. There are 150 science books, 125 math books, and 107 Spanish books. About how many books will be turned in?

About _____ books will be turned in.

38.

39.

40.

41.

42.

43.