

Name _____

Phonics


Use the words from the box with the short *ă* sound to fill in the blanks

backpack	camp	raft	lamp
sand	blanket	ax	cactus

1. A prickly plant in the desert is a _____.
2. A place to sleep outdoors is a _____.
3. The desert is made of this. _____
4. You need this to see at night. _____
5. This is used to carry things. _____
6. This keeps you warm at night. _____
7. To ride on a river, use a _____.
8. This is used to chop wood. _____



Look at the picture of the book, then answer the questions.




1. What is the title of this book?

2. Who is the author of this book?

3. Who drew the pictures in this book?

Read the story and answer the questions.

Kim went for a walk. She saw a lot of birds. She jumped over a rock. Then, she picked up two orange leaves. Kim had fun, but now it was time to go home.



1. Where did Kim go?

2. What did Kim see?

3. What did Kim pick up?

$$\begin{array}{r} 273 \\ + 189 \\ \hline \end{array} = 200 + 70 + 3$$

$$= + 100 + 80 + 9$$

$$300 + 150 + 12$$

300

150

+ 12

462


$$\begin{array}{r} 273 \\ + 189 \\ \hline 462 \end{array}$$



$$\begin{array}{r} 11 \\ 232 \\ + 369 \\ \hline 601 \end{array}$$



$$\begin{array}{r} 11 \\ 184 \\ + 357 \\ \hline 541 \end{array}$$



$$\begin{array}{r} 415 \\ + 398 \\ \hline \end{array}$$



$$\begin{array}{r} 364 \\ + 278 \\ \hline \end{array}$$



$$\begin{array}{r} 556 \\ + 366 \\ \hline \end{array}$$



$$\begin{array}{r} 356 \\ + 285 \\ \hline \end{array}$$

$$\begin{array}{r} 587 \\ + 239 \\ \hline \end{array}$$

$$\begin{array}{r} 488 \\ + 227 \\ \hline \end{array}$$

$$\begin{array}{r} 378 \\ + 443 \\ \hline \end{array}$$

$$\begin{array}{r} 297 \\ + 627 \\ \hline \end{array}$$

$$\begin{array}{r} 158 \\ + 465 \\ \hline \end{array}$$

$$\begin{array}{r} 544 \\ + 359 \\ \hline \end{array}$$

$$\begin{array}{r} 268 \\ + 298 \\ \hline \end{array}$$

$$\begin{array}{r} 155 \\ + 585 \\ \hline \end{array}$$




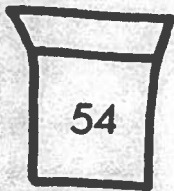









$$\begin{array}{r} 472 \\ + 359 \\ \hline \end{array}$$

$$\begin{array}{r} 299 \\ + 595 \\ \hline \end{array}$$


Name _____

Date _____

**Work the problems in the flowers below.
Draw a line to the correct pot.**



More Tens and Ones to Subtract



REMEMBER: Subtract the **ones** and then the **tens**!

1.
$$\begin{array}{r} 58 \\ - 36 \\ \hline \end{array}$$

$$\begin{array}{r} 77 \\ - 30 \\ \hline \end{array}$$

$$\begin{array}{r} 45 \\ - 24 \\ \hline \end{array}$$

$$\begin{array}{r} 26 \\ - 5 \\ \hline \end{array}$$

2.
$$\begin{array}{r} 86 \\ - 3 \\ \hline \end{array}$$

$$\begin{array}{r} 38 \\ - 17 \\ \hline \end{array}$$

$$\begin{array}{r} 67 \\ - 21 \\ \hline \end{array}$$

$$\begin{array}{r} 53 \\ - 30 \\ \hline \end{array}$$

3.
$$\begin{array}{r} 99 \\ - 65 \\ \hline \end{array}$$

$$\begin{array}{r} 85 \\ - 45 \\ \hline \end{array}$$

$$\begin{array}{r} 78 \\ - 4 \\ \hline \end{array}$$

$$\begin{array}{r} 37 \\ - 30 \\ \hline \end{array}$$

4.
$$\begin{array}{r} 48 \\ - 25 \\ \hline \end{array}$$

$$\begin{array}{r} 59 \\ - 30 \\ \hline \end{array}$$

$$\begin{array}{r} 76 \\ - 24 \\ \hline \end{array}$$

$$\begin{array}{r} 87 \\ - 3 \\ \hline \end{array}$$

Name _____

Date _____

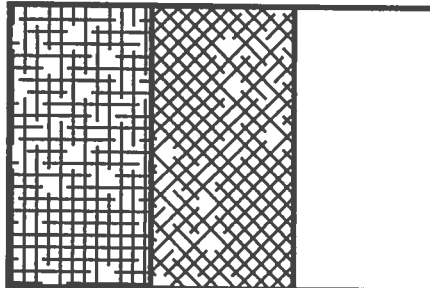
Exploring Fractions

Write how much of the shape is shaded.

The rectangle is cut into
3 equal parts, or thirds.
 $\frac{2}{3}$ of the rectangle is shaded.

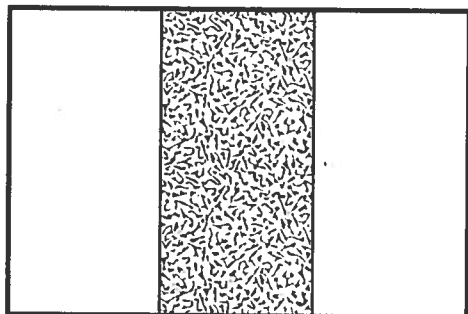


$\frac{2}{3}$



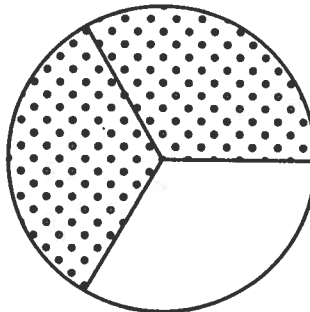
Each shape is cut into 3 equal parts.

1.



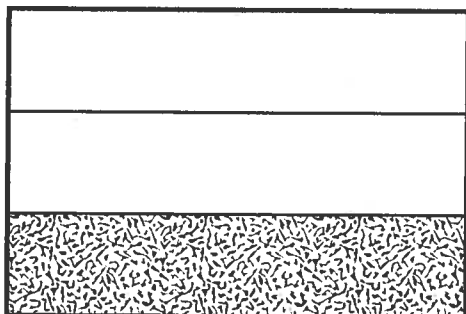
$\frac{1}{3}$

2.



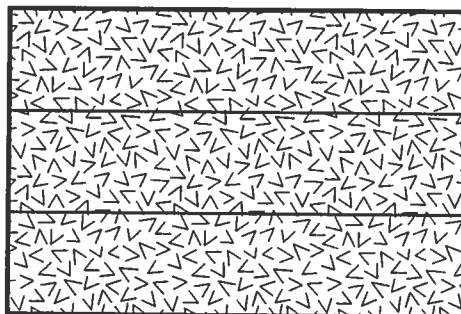
$\frac{2}{3}$

3.



$\frac{1}{3}$

4.



$\frac{3}{3}$

