

*Ms. Sue*  
*Room 8*

*Kindergarten*  
*Homework*

*Due: 03-20-2018*

*Spelling Test: 03-20-2018*

Dear parents,

In preparation of Open House, we will be sending home fewer homework pages for the next couple of weeks, so they can focus on their take home projects and scripts. They will continue to practice jobs and scripts at school but the extra practice at home would be greatly appreciated.

The open house schedule will be posted on Monday March 19<sup>th</sup>. If you have any questions about the project or scripts, please email at [esther@oneontamontessori.com](mailto:esther@oneontamontessori.com) or ClassDojo me.

Thank you,

Ms. Esther

# Blue Spelling Test # 9

\*Spelling test will be given on Monday/Tuesday, \_\_\_\_\_

- Day # 1 Read each word and draw a line from scrambled word to unscrambled word.
- Day # 2 Read each word and write it on a separate piece of paper.
- Day # 3 Read each word and take a practice test.
- Day # 4 Write any words you got wrong on the practice test 3 times.



## Consonant Digraph - 'th' (voiced)

- |         |      |
|---------|------|
| 1. this | hnat |
| 2. that | ahtt |
| 3. them | twhi |
| 4. than | thne |
| 5. then | thme |
| 6. with | sith |

## 'th' (unvoiced)

- |          |       |
|----------|-------|
| 7. bath  | htdu  |
| 8. thin  | tihn  |
| 9. thick | htab  |
| 10. thud | chtik |

# A Super Story!



Date	Name of the Book	Parent's Signature

**\*Kindergarteners are required to read for 20 minutes a day.\***


Name \_\_\_\_\_

## Here, Kitty

Jill saw Fluffy on the roof.

**She** got a ladder from the shed.

Soon she took her little, yellow kitten down.



1. Which word rhymes with **paw**?

\_\_\_\_\_

-----

\_\_\_\_\_

2. **She** stands for which word?

\_\_\_\_\_

-----

\_\_\_\_\_

3. Which word means **a young cat**?

\_\_\_\_\_

-----

\_\_\_\_\_

4. Which word is a color word?

\_\_\_\_\_

-----

\_\_\_\_\_

5. What is the cat's name?

\_\_\_\_\_


-----

\_\_\_\_\_



# Third Treasure

Bob ran to the hill. He looked at the map. He counted, "One, two, three," as he walked between the trees. He turned right and walked five more steps. There was a rock by a big bush. Bob moved the rock. He brushed away the dirt and saw something shiny. Wow! Bob found . . .



Answer the questions in complete sentences.

1. What did Bob find?

---

---

---

---

---

---

---

2. What did Bob do next?

---

---

---

---

---

---

---

**Extension:** Write your own treasure map story and include a map.



**Check What You Learned****Adding and Subtracting 2-Digit Numbers (With Renaming)**

Add.

$$\begin{array}{r} 42 \\ + 18 \\ \hline \end{array}$$

$$\begin{array}{r} 79 \\ + 5 \\ \hline \end{array}$$

$$\begin{array}{r} 85 \\ + 7 \\ \hline \end{array}$$

$$\begin{array}{r} 44 \\ + 29 \\ \hline \end{array}$$

$$\begin{array}{r} 15 \\ + 27 \\ \hline \end{array}$$

$$\begin{array}{r} 35 \\ + 28 \\ \hline \end{array}$$

$$\begin{array}{r} 25 \\ + 55 \\ \hline \end{array}$$

$$\begin{array}{r} 34 \\ + 19 \\ \hline \end{array}$$

$$\begin{array}{r} 63 \\ + 9 \\ \hline \end{array}$$

$$\begin{array}{r} 24 \\ + 39 \\ \hline \end{array}$$

$$\begin{array}{r} 47 \\ + 6 \\ \hline \end{array}$$

$$\begin{array}{r} 12 \\ + 38 \\ \hline \end{array}$$

$$\begin{array}{r} 57 \\ + 26 \\ \hline \end{array}$$

$$\begin{array}{r} 49 \\ + 11 \\ \hline \end{array}$$

$$\begin{array}{r} 16 \\ + 8 \\ \hline \end{array}$$

Subtract.

$$\begin{array}{r} 83 \\ - 44 \\ \hline \end{array}$$

$$\begin{array}{r} 68 \\ - 59 \\ \hline \end{array}$$

$$\begin{array}{r} 73 \\ - 38 \\ \hline \end{array}$$

$$\begin{array}{r} 30 \\ - 24 \\ \hline \end{array}$$

$$\begin{array}{r} 65 \\ - 39 \\ \hline \end{array}$$

$$\begin{array}{r} 53 \\ - 35 \\ \hline \end{array}$$

$$\begin{array}{r} 15 \\ - 9 \\ \hline \end{array}$$

$$\begin{array}{r} 47 \\ - 18 \\ \hline \end{array}$$

$$\begin{array}{r} 75 \\ - 37 \\ \hline \end{array}$$

$$\begin{array}{r} 26 \\ - 18 \\ \hline \end{array}$$

$$\begin{array}{r} 84 \\ - 46 \\ \hline \end{array}$$

$$\begin{array}{r} 60 \\ - 34 \\ \hline \end{array}$$

$$\begin{array}{r} 76 \\ - 29 \\ \hline \end{array}$$

$$\begin{array}{r} 52 \\ - 43 \\ \hline \end{array}$$

$$\begin{array}{r} 42 \\ - 27 \\ \hline \end{array}$$